

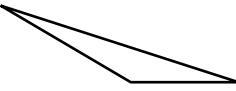
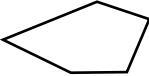
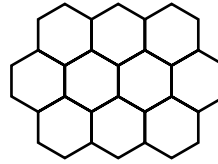


1. Which is NOT a polygon?


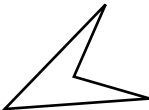
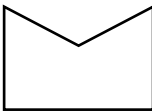
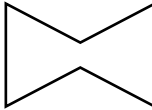
- A 
- B 
- C 
- D 

2. Walter used one shape to make this design. What is the name of the shape he used?



- A Octagon
- B Quadrilateral
- C Pentagon
- D Hexagon

3. Daniel drew a secret shape. He said, "It is convex." Which is Daniel's secret shape?

- A 
- B 
- C 
- D 

4. How many sides does a quadrilateral have?

- A 4
- B 5
- C 6
- D 8

5. How many diagonals does a rectangle have?

- A 1
- B 2
- C 3
- D 4

6. **Writing to Explain** Study the pattern. Describe the part that repeats by naming each figure. Tell what comes next in the pattern. Explain your answer.

